


Chapter – 1 Mango-Birds

Once upon a time in a forest, there was a small *cluster* of mango trees. In the spring, its branches were covered with beautiful mango *blossom* and the forest echoed with the happy buzzing of honeybees. Soon the flowers fell and in their place small mangoes began to appear.



SECTION -1

The sun grew hotter and the mangoes grew bigger. Slowly, they turned golden-yellow. When the trees were full of juicy mangoes, people and animals came to eat the delicious fruit.

Trees: Enjoy yourselves! Eat as much as you like, but leave some for others.

Boy 1: Are the trees talking to us?

Boy 2: Yes!



People said that there was a tree god who protected the forest and it was his voice.

Everyone who heard the voice obeyed it. The animals were wise. The monkeys plucked the mangoes. They ate half the fruit and threw the rest down. Then, the wild rabbits and the deer finished them. So, everyone enjoyed the fruit and nothing was wasted.



SECTION - 2

One day, a man came with a big sack. Inside it was a smaller bag. He climbed a mango tree and began to pluck the mangoes and fill the bag.

Tree: Eat as much as you like, but leave some for others. The

man didn't listen. He kept plucking the mangoes. When his bag was full, he emptied it



into the sack and climbed another tree to pluck more mangoes.

Tree: Will you eat the mangoes alone? They are for all, not just for you.

The sack was nearly full. Suddenly, the man heard a noise and turned. He was shocked! The mangoes were **tumbling out** of the sack and rolling away, all by themselves.

The Man: How strange! How can this happen? The man ran to collect the mangoes. But they got away from him, as if they were alive. He ran around, chasing the mangoes. Whenever he reached out to grab them, the mangoes jumped and rolled farther away.

The Man: Stop! All of you! I won't let you go! Then, right before his eyes, they turned into golden birds. The flock of golden birds rose from the ground and flew away. As the greedy man watched in **amazement**, the mango-birds vanished from his sight.

The Man: No! How can this be? This is impossible! People say that this is how the golden-yellow oriole bird was born.



To view the story, please click on the source link below:

[+ https://www.youtube.com/watch?v=cnfz3ZRqXS0](https://www.youtube.com/watch?v=cnfz3ZRqXS0)



Word- meanings

Cluster: group

Amazement : surprise

Tumbling out : falling out

Blossom: flowers

Delicious: tasty



A) Fill in the blanks:

- i) The flowers fell and in their place _____ began to appear.
- ii) As the mangoes grew big and ripe, they became _____.
- iii) People obeyed the tree god because they believed that he _____ the forest.
- iv) Everyone was able to enjoy the _____ because the wise animals shared it wisely.
- v) In spring, the branches of the mango trees were covered with _____.

B) Write Yes or No:



- i) One day a man arrived to pluck mangoes from the tree. _____
- ii) He had come with two of his friends. _____
- iii) He had a big sack and a small bag. _____
- iv) The tree god spoke to the man. _____
- v) The man listened carefully to the tree god. _____



C) Answer the following questions:



- i) How did the animals share the mangoes?
- ii) Did the man obey the tree god? Why?
- iii) How was the golden-yellow oriole born?



कक्षा - IV हिन्दी वर्कशीट - 4

संज्ञा

● किसी व्यक्ति, वस्तु, स्थान, प्राणी या भाव के नाम को संज्ञा कहते हैं।

उदाहरण :-

- 1) व्यक्ति → राम, नेहा, महात्मा गाँधी
- 2) वस्तु → मेज, पेंसिल, किताब, चाबी
- 3) प्राणी → बिल्ली, मछली, तितली, शेर
- 4) स्थान → स्कूल, लालकिला, जंगल, दिल्ली
- 5) भाव → खुशी, क्रोध, बुढ़ापा, लालच

प्रश्न-I → नीचे लिखे वाक्यों में संज्ञा शब्द पर चिह्न लगाओ :-

- 1) सुझे कुछ खिलौने खरीदने हैं।
- 2) आज मैं बाजार जाऊँगी।
- 3) वह जोर-जोर से हँसने लगी।
- 4) कल हम ताजमहल देखने चाये थे।
- 5) मैंने हाथी की सवारी की।
- 6) लालच बुरी बला है।
- 7) कश्मीर की सुंदरता देख कर खुशी हुई।
- 8) गीता धार्मिक ग्रंथ है।
- 9) चिड़िया बूढ़ पर बैठी है।
- 10) गर्मी में बहुत प्यास लगती है।

प्रश्न-II → सही शब्द चुनकर संज्ञा शब्द भरो :-

कुम्हार

सखली

थोड़ा

क्रोध

भैला

सूरज

- 1) आसमान में..... चमक रहा है।
- 2) सवारी के काम आता है।
- 3) यह..... उधर रख दो।
- 4) हमें..... नहीं करना चाहिए।
- 5) मिट्टी के बर्तन बनाता है।
- 6) तालाब में..... तैर रही है।

प्रश्न-III → दिए गए शब्दों में से जातिवाचक और व्यक्तिवाचक संज्ञाएँ ढाँटिए :-

देवता , दिल्ली , कवि , पुस्तक , दीपावली
त्योहार , कबीरदास , राजधानी , गीता , गणेश

जातिवाचक :-

व्यक्तिवाचक :-

प्रश्न-IV → हरेक के तीन-तीन नाम (संज्ञा) लिखो :-

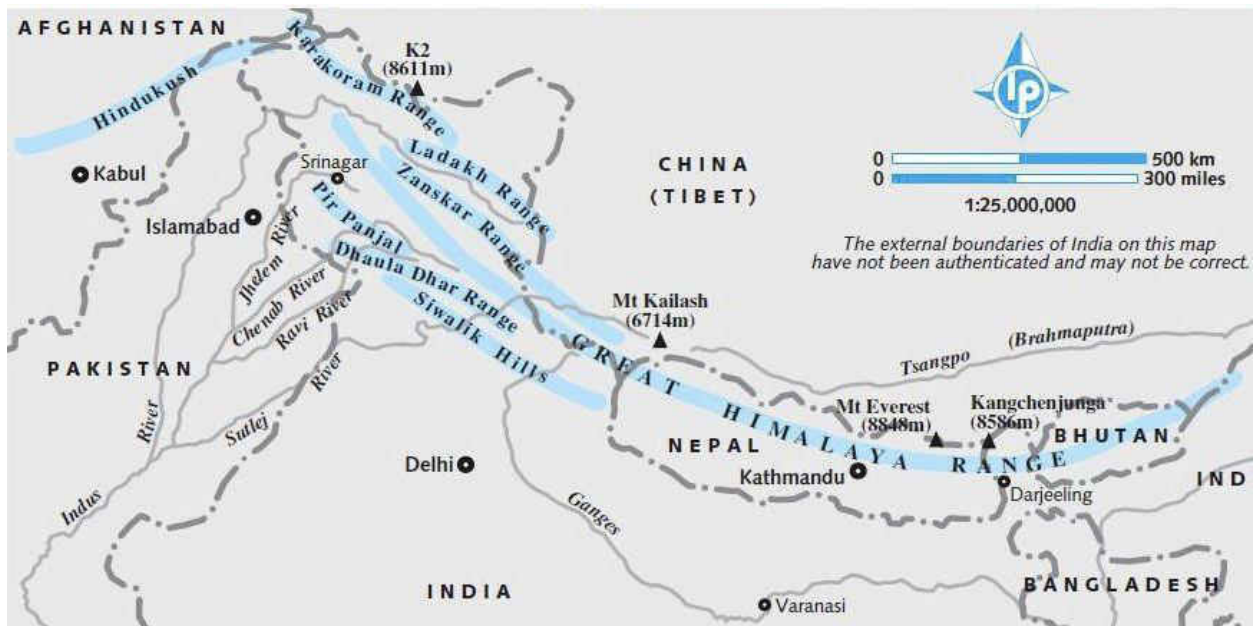
खेलों के नाम

त्योहारों के नाम

फूलों के नाम

- 1)
- 2)
- 3)

The Himalayas stretch from Jammu and Kashmir to Arunachal Pradesh. Most of the peaks remain snow covered throughout the year. Mt. Everest in the Himalayas is the highest peak. The Himalayas consist of three parallel ranges i.e. Himadri, Himachal and Shivalik. Farming is the main occupation of the people. Due to lack of plain land, farmers have cut steps or terraces along the slopes. On these steps they grow rice, maize, barley and potatoes. Such farming is called terrace farming.



TERRACE FARMING

Question 1 Answer the following questions:

- a) Where are the Himalayas located?
- b) Name the three parallel ranges of the Himalayas.
- c) What is terrace farming?
- d) Why is terrace farming popular in the mountains?
- e) Name any two crops that farmers grow in the mountains.

PROJECT WORK

Question 2 Circle the words that are related to the word 'Mountains':



- | | | |
|-----------|-----------|-----------|
| a) Height | f) Snow | k) Valley |
| b) Delta | g) Oasis | l) Plains |
| c) Comet | h) Ranges | |
| d) Peak | i) Slope | |
| e) River | j) Source | |

For more information, kindly refer to the links given below:-

- <https://youtu.be/0v6-fB-gftQ>
- <https://youtu.be/uDcLnum5ck0>

REPRODUCTION IN ANIMALS

The process by which living things produce more of their own kind, is called reproduction. Animals which give birth to young ones and feed them on their milk are called mammals. For example, cats, humans, etc. They are most developed among all animals. Birds, fish, frogs, reptiles like lizards, turtles and snakes and all insects reproduce by laying eggs. The eggs of all birds have a similar internal structure. Each egg has a hard protective outer shell. Within the shell is the egg white called albumen. The chick is formed and grows inside the yolk. A growing baby is called an embryo. Within the albumen is the round, yellow yolk. Some insects like grasshoppers and cockroaches have three stages in their life cycle. Other insects like houseflies and butterflies have four stages in their life cycle.

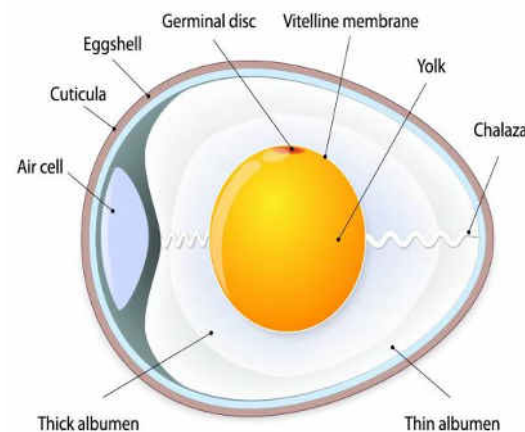
➤ **For more information, please visit:**

- <https://youtu.be/51Pyaf4ptc>
- <https://educationwithfun.com/course/view.php?id=18§ion=5>

Question1 Fill in the blanks:

- a) The process by which living things produce young ones is called _____.
- b) Mammals give birth to _____ and feed them on their milk.
- c) Reptiles reproduce by laying _____.
- d) The yellow part in the bird’s egg is known as _____.
- e) _____ are the most developed among all animals.
- f) A growing baby is called an _____.

CHICKEN EGG

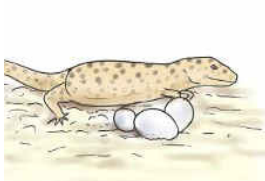


Question2 Match the following:

- | | |
|----------------|------------------------------|
| a) Birds | i) Three stage life cycle |
| b) Cats | ii) Four stage life cycle |
| c) Grasshopper | iii) Egg white |
| d) Albumen | iv) Give birth to young ones |
| e) Butterfly | v) Lay eggs |

Question3 Unscramble the letters to get the names of four egg-laying animals:

ZILDRA NSKAE IFHS URTLET



✚ Watch the videos using the links given below:

1. https://youtu.be/Sn_fOmbpT6Q
2. https://youtu.be/qj2cjwYR_DU


✚ Learn the tables 2 to 12 thoroughly.

Question 1 Write the following numbers:

- a) Greatest 5 digit number
- b) Greatest 7 digit number
- c) Smallest 4 digit number
- d) Smallest 6 digit number

Question 2 Write in the descending order:

- a) 9999, 999,99999,99
- b) 4312,4003,4203,4310



Question 3 Study the place value chart carefully and write the following place values:

CRORES		LAKHS		THOUSANDS		ONES	
Crores (C)	Ten lakhs (TL)	Lakhs (L)	Ten thousands (TTh)	Thousands (Th)	Hundreds (H)	Tens (T)	Ones (O)
7	8	5	4	6	7	9	2

- a) 8 in 981643
- b) 2 in 347026
- c) 6 in 746230

Question 4 Mental Maths:

- a) $100 + 49 = \underline{\quad}$
- b) $700 + 0 = \underline{\quad}$
- c) $699 - 1 = \underline{\quad}$
- d) $12 \times 7 = \underline{\quad}$
- e) $8 \times 8 = \underline{\quad}$
- f) $680 + \underline{\quad} = 690$
- g) Spellings of 100 =
- h) $\times 1000 = 0$
- i) $9 \times 4 \times 1 = \underline{\quad}$
- j) $62 + 11 = \underline{\quad}$

Topic: Computer – A Storage and Memory Device



Recap: <https://youtu.be/rBjo4USiqEs> (Please use this link)

(Revision of Storage and Memory Device)

Question 1: Name the Hardware device shown below and the amount of data they can store:

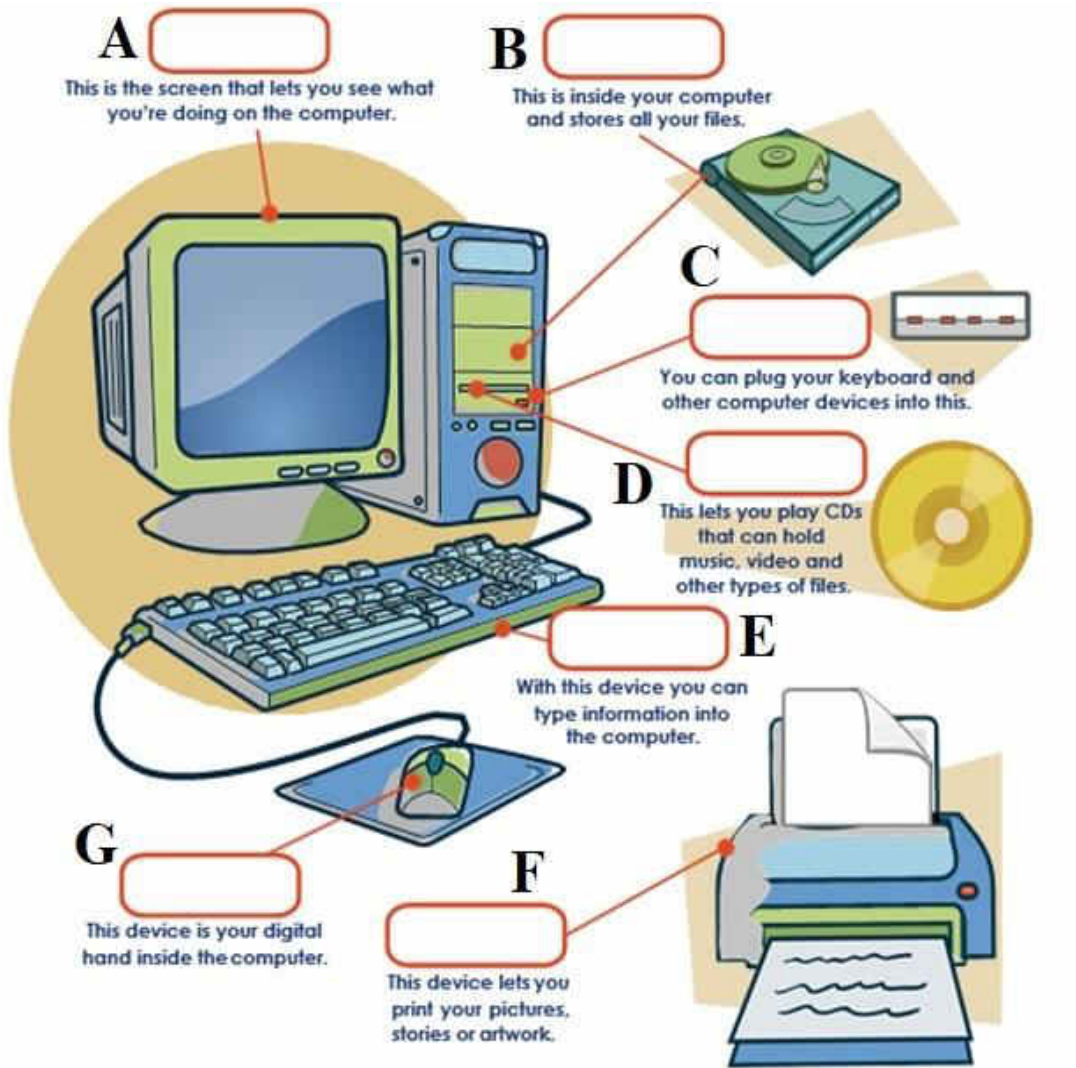
Picture	Name of the Hardware Device	Data Storage (Upto)
A.	_____	_____
B.	_____	_____ [* 3 1/2-inch Superdisk(LS-240)]
C.	_____	_____
D.	_____	_____
E.	_____	_____
F.	_____	_____

Note: [* 3 1/2-inch Superdisk (LS-240)] in terms of Formatted/Marketed Capacity

Question 2: Answer the following questions:

- What is a Multimedia card?
- Write down any two features of ROM.
- Differentiate between Internal and External memory.
- Why is RAM compared with blackboard or calculator?

Question 3: Name all these computer parts i.e. A to G with the help of clues and descriptions given below:



Clues:

Mouse

Hard Drive

CD ROM

Monitor

USB Port

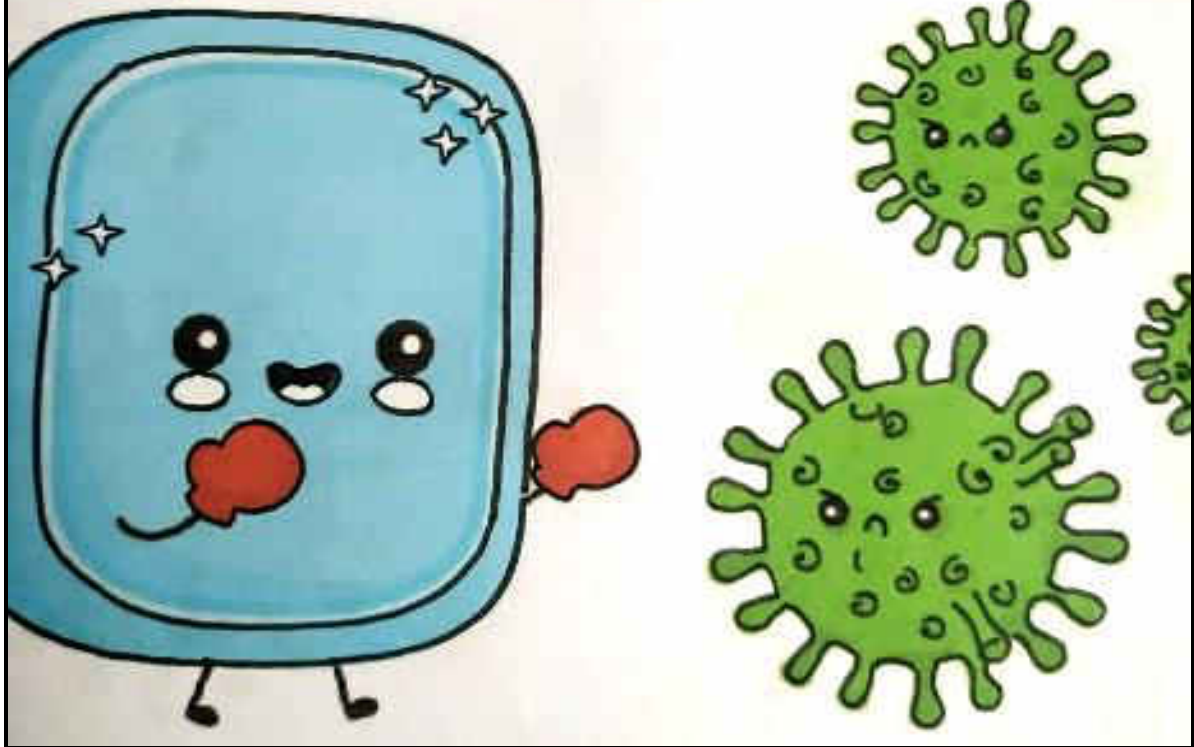
Keyboard

Printer



DRAW AND COLOUR,

Give a Suitable Caption



PUNJABI WORKSHEET-2

CLASS - IV

ST. XAVIER'S
MOHALI &
ZIRAKPUR

ਪ੍ਰ1. ਹੇਠ ਲਿਖੇ ਸ਼ਬਦਾਂ ਦੇ ਵਚਨ ਬਦਲੋ -

1. ਬੱਚਾ - _____	6. ਖੇਡ - _____
2. ਪੰਨਮਿਲ - _____	7. ਕਵਿਤਾ - _____
3. ਗਾਂ - _____	8. ਹਵਾ - _____
4. ਚਿੜੀ - _____	9. ਫੁੱਲ - _____
5. ਤਿਤਲੀ - _____	10. ਰੁਖੜ - _____

ਪ੍ਰ2. ਹੇਠ ਦਿੱਤੇ ਵਾਕਾਂ ਵਿੱਚ ਖਾਲੀ ਥਾਵਾਂ ਚ ਨਾਂ ਦ ਭਰੋ -


1. ਮੈਂ _____ (ਮੋਹਾਲੀ / ਖਿੰਡ) ਵਿਖੇ ਰਹਿੰਦਾ ਹਾਂ।
2. ਮੈਂ ਬਹੁਤ _____ (ਗਰਮੀ / ਖੁਸ਼) ਹਾਂ।
3. _____ ਮਹੀਨੇ (ਮਈ / ਜਨਵਰੀ) ਵਿੱਚ ਮੀਂਹ ਆਉਂਦਾ ਹੈ।
4. ਮੇਰੇ _____ (ਸਕੂਲ / ਪਾਠ) ਮੈਂ ਛੁੱਟੀ ਹਾਂ।
5. ਮੈਂ _____ (ਫੁਟਬਾਲ / ਖੇਡ) ਖੇਡਣਾ ਪਸੰਦ ਹਾਂ।

ਪ੍ਰ3. ਮਿਲਾਨ ਕਰੋ -

1. January	ਫੱਗਣ
2. February	ਚੇਤਰ
3. March	ਮਾਘ
4. April	ਗੜ
5. May	ਜੇਠ
6. June	ਵਿਸਾਖ

ਪ੍ਰ4. Translation ਕਰੋ -

1. Who is this man?
2. Please forgive me!
3. He is very clever.
4. I will go back home.
5. What are you doing?





ANSWER KEY TO PREVIOUS WORKSHEET

ENGLISH:

I. IDENTIFY THE TYPE OF SENTENCE:

- 1) Interrogative Sentence
- 2) Assertive Sentence
- 3) Assertive Sentence
- 4) Exclamatory Sentence
- 5) Imperative Sentence
- 6) Exclamatory Sentence

Project Work: Student's Choice

HINDI:

प्र०१.
१) पेड़ में फल लगे हैं।
२) चिड़िया उड़ रही है।
३) तिरंगा हमारा राष्ट्रीय ध्वज है।
४) हमें आँखों का ध्यान रखना चाहिए।
५) मुझे शरबत पीना पसंद है।
६) यह फूल बहुत सुंदर है।
प्र०२.
१) बौतल २) गरम ३) बाग ४) मिठ ५) सूरज ६) हॉकी
प्र०३.
गोब्री, मूली, पालक, चीया, मटर, आलू

SCIENCE:

Question 1 Fill in the blanks:

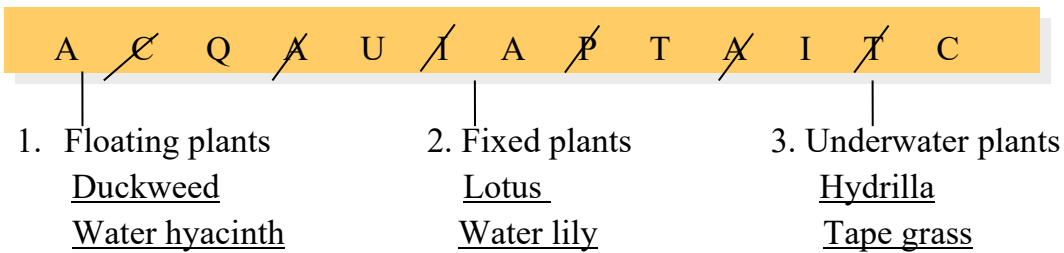
- a) Needle-like
- b) No leaves
- c) Insectivorous
- d) Mangroves
- e) Desert

Question2 Match the following:

- a) Mango
- b) Sundew
- c) Pine
- d) Mangroves
- e) Coconut
- v) Plains
- iii) Insectivorous plant
- ii) Hilly area
- i) Marshy area
- iv) Hot and damp area

PROJECT (SCIENCE)

Plants that grow in water are called aquatic plants.



* Students can write any two examples of each kind.

MATHS:

Question 1

a) $4545 < 5454 < 6727 < 9767$

b) $1734 < 1744 < 4247 < 4731$

Question 2 a) 69489

b) 477899

Question 3 a) 16678

b) 11398

Question 4 a) 456

b) 15702

Question 5 a) 9273

b) 23505

Question 6 Mental Maths:

a) 940 b) $237 - 0 = 237$ c) 300 d) 5900 e) 27345 f) 74110

g) 99999 h) 100000 i) 4617 j) $4 \text{ ones} + 8 \text{ ones} = 12 \text{ ones}$

COMPUTER:

A. Fill in the blanks:

- a) CPU
- b) Information
- c) bits
- d) Pendrive / Thumb Drive
- e) RAM

B. State True or False:

- a) False
- b) True
- c) True
- d) True

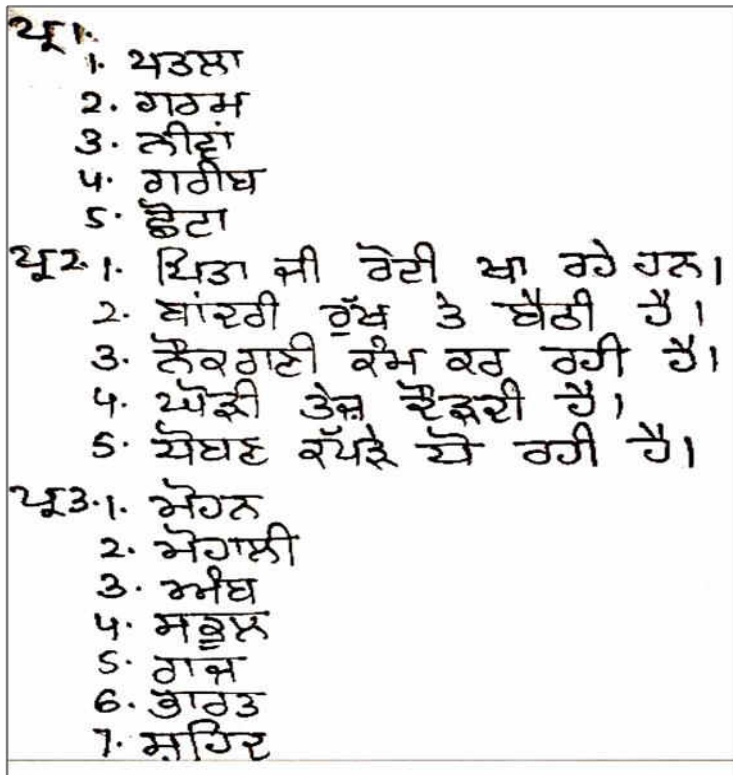
C. Multiple Choice Questions:

- a) ROM
- b) 2TB
- c) Both i) and ii)
- d) Bytes
- e) Hard Disk

D. Write the full form of the following:

- a) USB: Universal Serial Bus
- b) CD-RW: Compact Disc - ReWritable
- c) ROM: Read Only Memory
- d) DVD: Digital Versatile/Video Disk
- e) CD-R: Compact Disc-Recordable
- f) CPU: Central Processing Unit
- g) GUI: Graphical User Interface
- h) RAM: Random Access Memory

PUNJABI:



Answer key of this worksheet will be given with the next worksheet.