

LESSON -3 DRESSING UP DAY



Write these words thrice and learn the spellings. Check the English pronunciation of each word on the net and practice it.

1. Laughter
2. Dressing
3. Gardener
4. Soldier
5. Potter
6. Excited
7. Engineer
8. Bridges
9. Chef
10. Hotel



Word- Meanings:

1. Excited – to be eager
2. Hurry – to move quickly
3. Healthy – good health
4. Noise – loud sound
5. Mess – to dirty



Make Sentences:

(The first two have been done for you, write the next three.)

1. Hurry – I had to hurry up to reach school in time.
2. Excited – I am very excited to meet my uncle.
3. Healthy –
4. Noise –
5. Mess –



Question / Answers:

Q 1. Why are the children of class 2 excited?

Ans. The children of class 2 are excited as they are going to put up a show.

Q 2. How does a gardener help to make our world beautiful?

Ans. A gardener takes care of the plants, he waters them and keeps them healthy.

Q 3. What does a soldier do?

Ans. A soldier guards and fights for the country.

Q 4. What does a potter make?

Ans. A potter makes pots and toys.



निबंध- सैर का महत्व

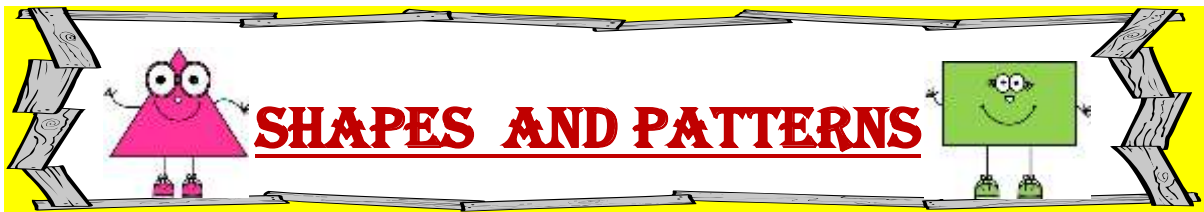
सैर शरीर के लिए बहुत लाभ-
दायक होती है। दिन में दो बार
सैर करना बहुत जरूरी है। ठण्डी
और स्वच्छ हवा मन व तन को
तरोताजा रखती है।

सैर करने से सभी बीमारियाँ दूर
रहती हैं। मन शांत रहता है।
पाचन शक्ति मजबूत होती है। सैर
करना सब के लिए जरूरी है।

नोट: दिया गया निबंध लिखें व याद करें।
सुबह की सैर के कोई दो लाभ लिखो।




1. _____
2. _____



Question 1 Colour the following:


Colour **red** the shapes made with straight lines (———).





Colour **green** the shapes made with curved lines (———).







FLAT SHAPES

Question 2 Count and write the names of the shapes in the picture. Colour the shapes according to the colour code in the table:

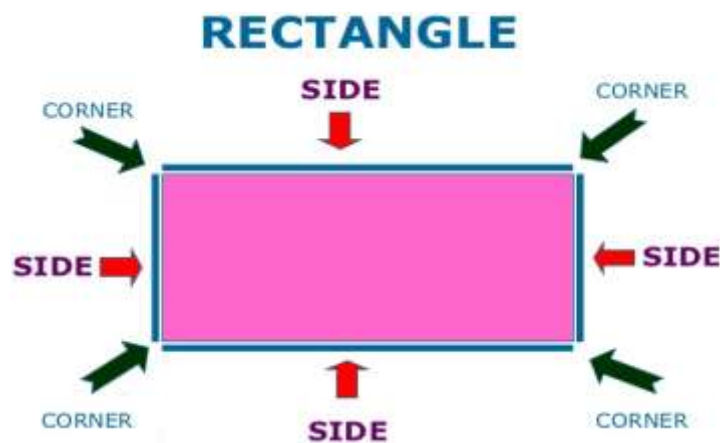
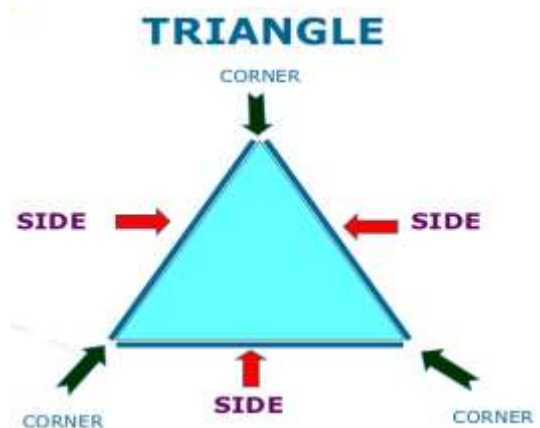
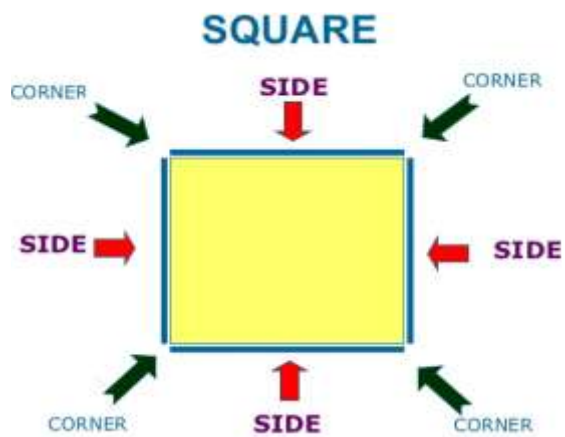


<u>SHAPE</u>	<u>NAME</u>	<u>NUMBER</u>
		
		
		
		

Question 3 How many corners and sides do these flat shapes have?

<u>SHAPE</u>	<u>CORNERS</u>	<u>SIDES</u>	<u>FACTS TO REMEMBER</u>
	4	4	All 4 sides are equal.
			Opposite sides are equal.
			Its sides may or may not be equal.
			It has no sides or corners.

REMEMBER



Question 4 Fill in the missing numbers (501-600):

501				505				509	
		513				517			520
	522			525					
531					536			539	
		543					548		
551				555					560
			564				568		
	572				576				
581							588		
	592			595					600



❖ **Learn tables 2 to 10 thoroughly**

Lesson - 6

My Neighbourhood



Question 1 Question / Answers:

a) What is a neighbourhood?

Ans The area around a house is called a neighbourhood.

b) What do we use an ATM for?

Ans We use an ATM for taking out money from the bank account.

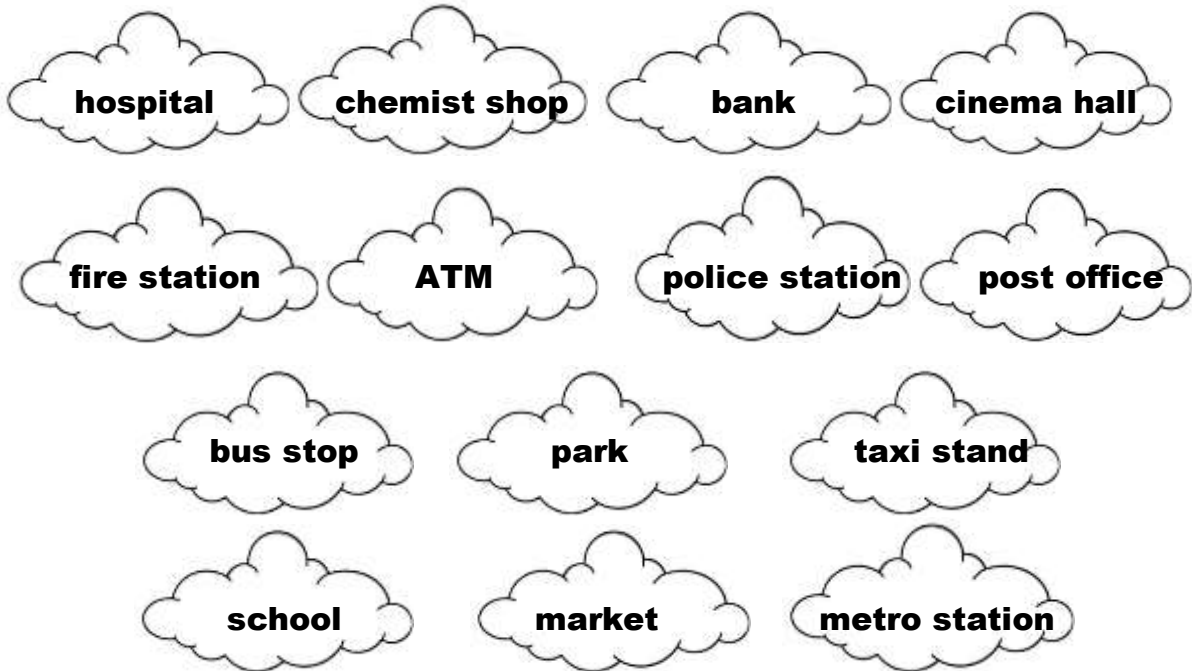
c) How does the police help us?

Ans The police guards our neighbourhood and keeps it safe.



Read L - 6 and refer to PPT/ Video to answer the following questions.

Question 2 Colour the clouds which have names of places that are there in your neighbourhood :



Question 3 Match the vehicles to the neighbourhood places:



Police station









Post office

Fire station

Hospital



ACTIVITY

1. Rajbir  is a chemist. He sells  E I _____
2. Shanti  is a greengrocer. She sells  _____E B _____
3. Shama  is a tailor. She stitches  L _____H _____
4. Madan  is a plumber. He mends broken  _____P _____

CLASS - II

ਹੋੜਾ (੨) ਭਾਤਰਾ

I ਹੇਠ ਲਿਖੇ ਸ਼ਬਦਾਂ ਵਿੱਚ ਸਹੀ ਥਾਂ ਤੇ ਹੋੜਾ (੨) ਭਾਤਰਾ ਲਗਾਓ -

1. ਹਟਲ = _____	6. ਰਟੀ = _____
2. ਰਮਈ = _____	7. ਗਲ = _____
3. ਕਰੜ = _____	8. ਕਟ = _____
4. ਛਟਾ = _____	9. ਅਖਰਟ = _____
5. ਤਲ = _____	10. ਗਭੀ = _____

II ਸਹੀ ਸ਼ਬਦ ਚੁਣੋ ਅਤੇ ਘੋਰਾ ਲਗਾਓ -

1. ਸੋਰ / ਸੋਰੇ	5. ਭੋਜਨ / ਭਜੋਨ
2. ਬਲੇ / ਬੋਲ	6. ਰਮੋਤ / ਰੇਮਤ
3. ਸੋਹਣਾ / ਸਹੋਣਾ	7. ਖਮੋਟਰ / ਖੇਮਟਰ
4. ਸਮੋਵਾਰ / ਸੋਮਵਾਰ	8. ਕਲੇ / ਕੋਲ

III ਵਾਰ ਬਣਾਓ -

1. ਗੋਲ - _____
2. ਬੋਤਲ - _____
3. ਘੋੜਾ - _____
4. ਟੇਕਰੀ - _____
5. ਭੋਜਨ - _____

Answer key to the Previous Worksheet



ENGLISH



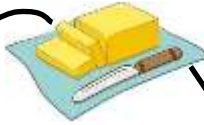


EXERCISE 1 Fill in the blanks with words from the box:

1. bridges
2. beautiful
3. potter
4. country
5. chef

EXERCISE 2 Fill in the blanks with words from the box:

1. farmer
2. pilot
3. teacher
4. policeman
5. doctor

EXERCISE 3 Match the columns:

1. Bread		a. thread
2. Needle		b. night
3. Door		c. key
4. Day		d. window
5. Lock		e. butter

EXERCISE 4 Unscramble the letters to name the pictures:

GLASS

GLOBE

GLOVES

HINDI

- क. चिड़ियाघर में हम जानवरों व पक्षियों को देखने जाते हैं।
2. शेर की दहाड़ सुनकर ध्रुव डर गया।
3. ध्रुव और श्रेया हाथी पर बैठ कर घूमे।

- ख. लंगूर
2. दहाड़
3. हाथी
4. सुंदर

- ग. 1. ✓
2. ✗
3. ✗
4. ✓

MATHS

Question 1 Subtract:

- a) 18
b) 16
c) 27
d) 05
e) 37
f) 27

CHECK

b)

$$\begin{array}{r} 24 \\ + 23 \\ \hline 47 \\ \hline \end{array}$$

c)

$$\begin{array}{r} 33 \\ + 41 \\ \hline 74 \\ \hline \end{array}$$

WORD PROBLEMS

T O

$$\begin{array}{r} \text{No. of children} = 1 \quad 3 \\ \text{No. of girls} = - \quad 9 \\ \hline \text{No. of boys} = \quad 4 \end{array}$$

Ans = 4 boys

T O

$$\begin{array}{r} \text{No. of sweets Tanya had} = 2 \quad 2 \\ \text{No. of sweets she ate} = - \quad 5 \\ \hline \text{No. of sweets left} = \quad 7 \end{array}$$

Ans = 17 sweets

T O

$$\begin{array}{r} \text{Total no. of rabbits} = 1 \quad 5 \\ \text{No. of rabbits hopped away} = - \quad 7 \\ \hline \text{No. of rabbits left} = \quad 8 \end{array}$$

Ans = 8 rabbits

DODGING TABLES

- 56
- 36
- 12
- 25
- 64

E.V.S

Question 1 Tick the correct answers:

1. A city has many:
a. neighbourhoods. b. jungles. c. rivers.
2. We can buy eggs and bread from a:
a. hospital. b. bank. c. market.
3. An ATM is an automatic machine of a:
a. bank. b. market. c. hospital.

Question 2 Who does what? Match the following:

1. I deliver letters and money orders. I am iii. a postman.
2. I put out fires and save people. I am v. a firefighter.
3. I look after people who are sick. I am i. a nurse.
4. I sell different things to you. I am ii. a shopkeeper.
5. I keep the neighbourhood safe. I am iv. a policeman.

Question 3 Put a tick () against what good neighbours do. Put a cross () against what good neighbours do not do.

1.
2.
3.
4.
5.

PUNJABI

- I 1. ਵੈਟ
2. ਘੋੜਾ
3. ਧੌਬੀ
- II 1. ਵੈਸਤ
2. ਧੌਬੀ
3. ਧੌਬਣ
- III 1. ਵੈਲ
2. ਕੋਰਰ
3. ਤੋਤਾ
4. ਮੋਟਰ
5. ਛੋਟਾ
6. ਵੈਸਤ
4. ਸਰੋਸਾ
5. ਟੋਕਰੀ
6. ਬੋਤਲ

Answer key of this worksheet will be given with the next one.